

Name: \_\_\_\_\_

## Exercise 5A

### Question 1a

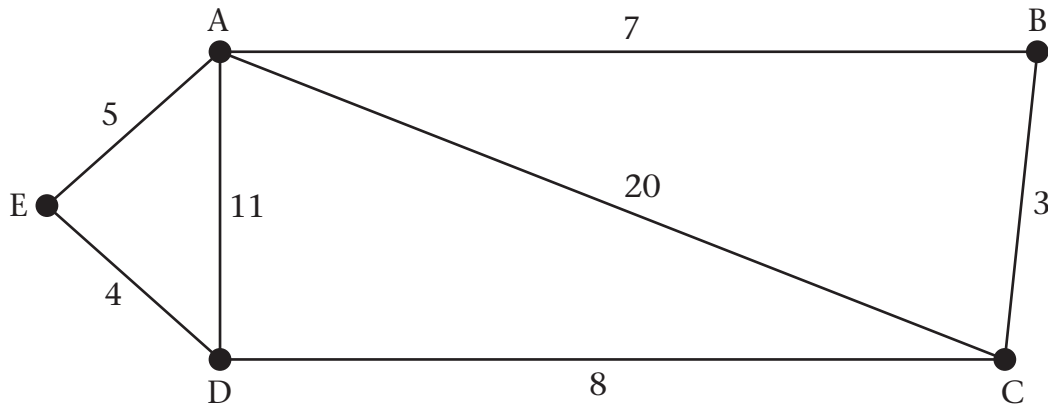


Table of least distances

	A	B	C	D	E
A	-	7			5
B	7	-	3		
C		3	-	8	12
D			8	-	
E	5		12	4	-

---



---



---



---



---



---



---



---



---



---

Name: \_\_\_\_\_

**Exercise 5A**

**Question 1b**

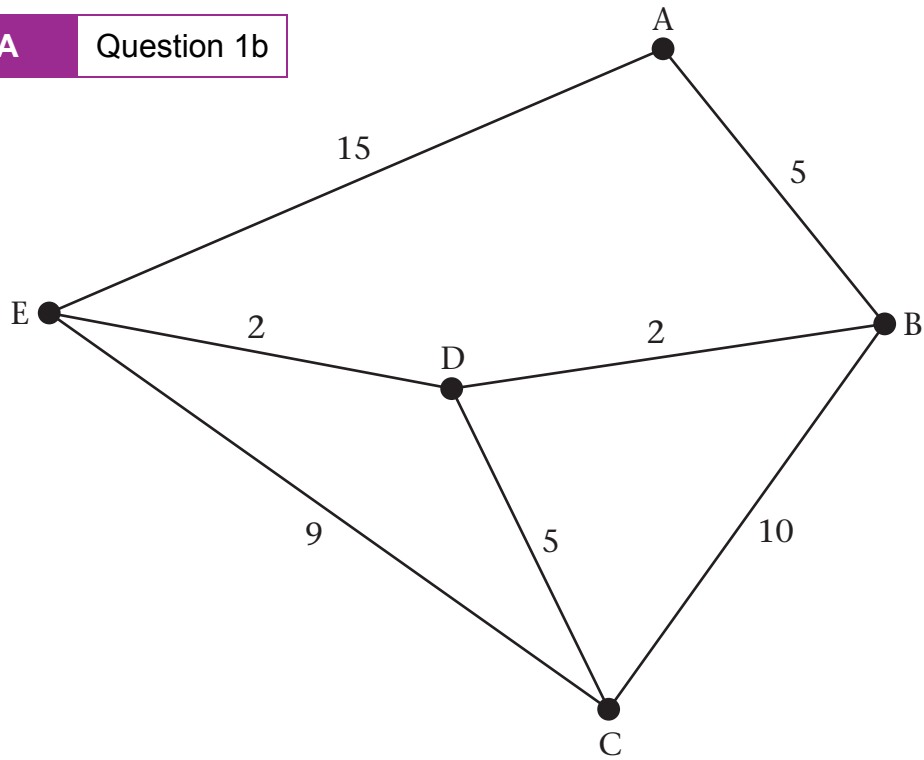


Table of least distances

	A	B	C	D	E
A	-	5		7	
B	5	-		2	
C			-	5	
D	7	2	5	-	2
E				2	-

---

---

---

---

---

---

---

---

---

---

---

---

Name: \_\_\_\_\_

**Exercise 5A**

**Question 1c**

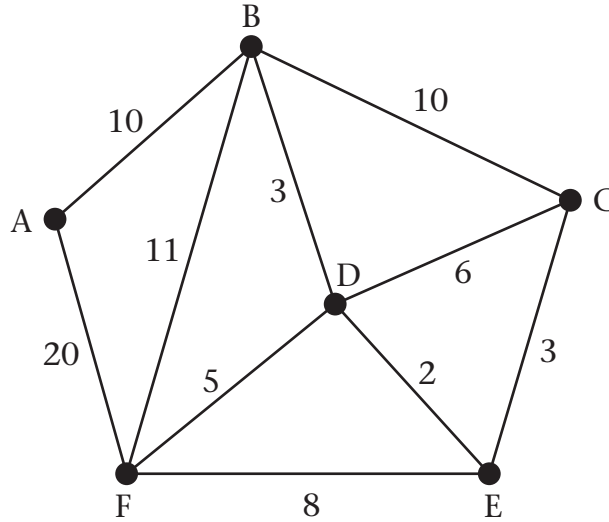


Table of least distances

	A	B	C	D	E	F
A	-	10		13	15	
B	10	-		3		
C			-		3	
D	13	3		-	2	5
E	15		3	2	-	
F				5		-

---

---

---

---

---

---

---

---

---

---

Name: \_\_\_\_\_

**Exercise 5A**

**Question 1d**

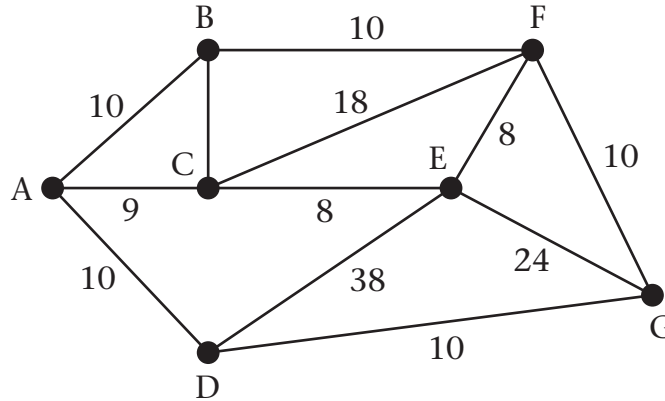


Table of least distances

	A	B	C	D	E	F	G
A	-	10	9	10	17		
B	10	-	3	20		10	20
C	9	3	-	19	8		
D	10	20	19	-		20	10
E	17		8		-	8	18
F		10		20	8	-	10
G		20		10	18	10	-

---

---

---

---

---

---

---

---

---

---